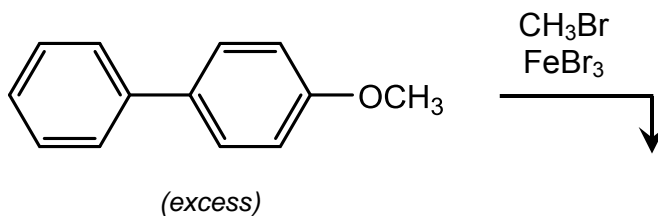
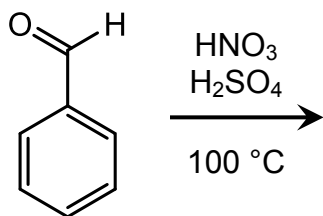
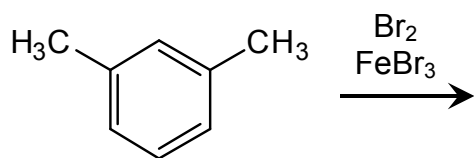


**In-Class Exercise:
Predicting Products From Electrophilic Aromatic Substitution**

For each of the reactions below, predict the major product(s).



(continued on next page)

