

NAME \_\_\_\_\_

ID # \_\_\_\_\_

## ORGANIC CHEMISTRY I (2301)

9:30 – 10:20 am, July 9, 2012

### Exam 2

If you want to pick this exam up on Tuesday in class (in public), please check the box on the right:

If you do not check the box, I will not bring your exam to class on Tuesday, and you will need to pick up your exam in private from Chemistry department staff in 115 Smith beginning Wednesday, July 11<sup>th</sup>. Exams that are not picked up within two weeks will be disposed of.

---

A periodic table is attached to the back of this exam as an aid. Otherwise, you are not permitted to use any other materials (including notes, books, or electronic devices of any kind).

Right now, write your name and student ID number at the top of this page. When the exam begins, please write your name at the top of the next page.

You may use pen or pencil. However, re-grades will be considered only for exams completed in pen.

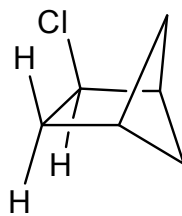
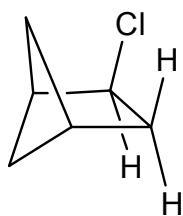
Please write your answers in the boxes/spaces provided. If your answer is not in the appropriate space (say, for example, it's on the back of the page), draw us an arrow and/or note telling us where to look.

NAME \_\_\_\_\_

Scoring: 1. \_\_\_\_\_ / 12                      4. \_\_\_\_\_ / 12  
2. \_\_\_\_\_ / 19                      5. \_\_\_\_\_ / 23  
3. \_\_\_\_\_ / 20                      6. \_\_\_\_\_ / 14

**Total Score:** \_\_\_\_\_ / 100

1. (12 pts) How would you describe the relationship between each of the pairs of structures below? Are they enantiomers or diastereomers, or are they just two ways of illustrating the same molecule? **Circle one answer** for each pair.



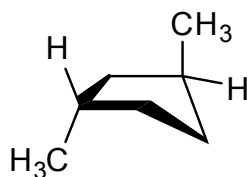
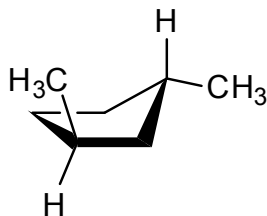
**ENANTIOMERS**

*or*

**DIASTEREOMERS**

*or*

**SAME MOLECULE**



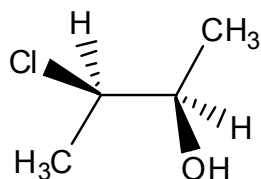
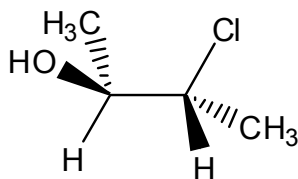
**ENANTIOMERS**

*or*

**DIASTEREOMERS**

*or*

**SAME MOLECULE**



**ENANTIOMERS**

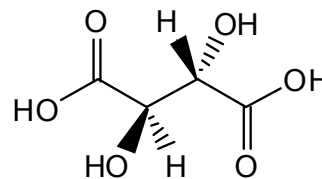
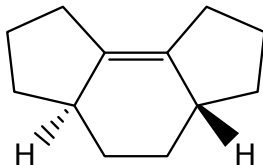
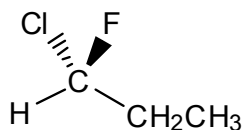
*or*

**DIASTEREOMERS**

*or*

**SAME MOLECULE**

2. (19 pts) On the structures below, **label each chiral center** with its appropriate Cahn-Ingold-Prelog designation [*R*] or [*S*]. Make it clear which atom in the drawing you are labeling. Then, for each structure, **circle** whether you think the molecule is chiral or achiral.



**CHIRAL**

or

**ACHIRAL ?**

**CHIRAL**

or


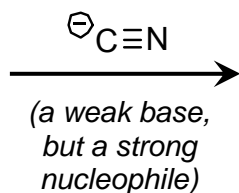
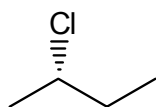
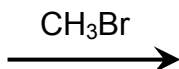
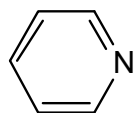
**ACHIRAL ?**

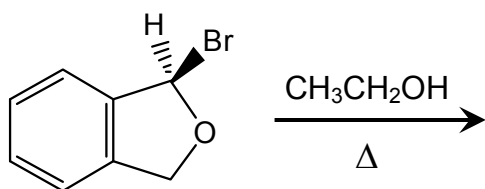
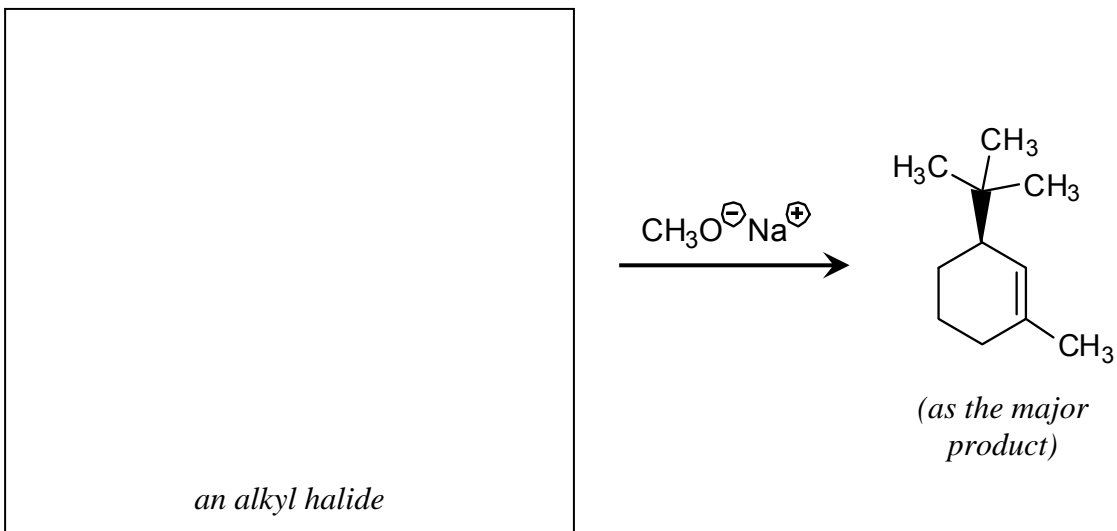
**CHIRAL**

or

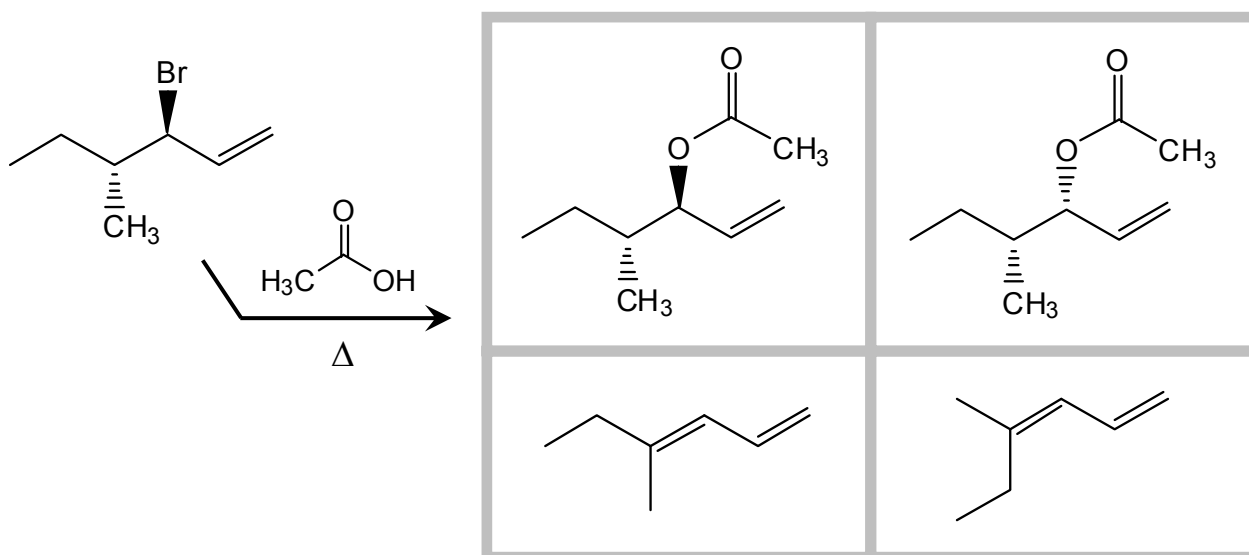
**ACHIRAL ?**

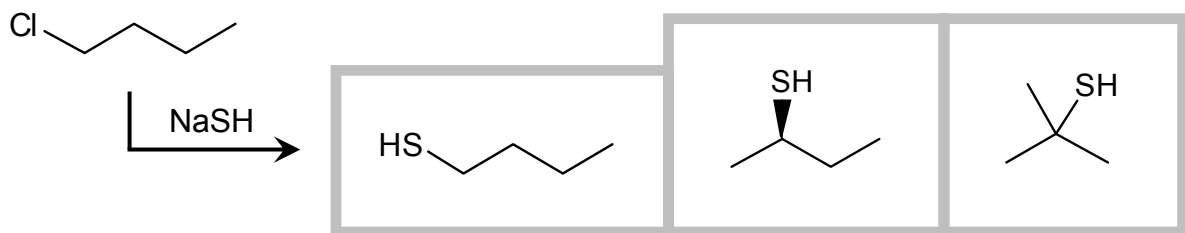
3. (20 pts) Draw the missing reactant or product in the empty boxes. For products, give the predominant, most favored product. Illustrate stereochemistry in your answer where appropriate. For reactions that yield multiple enantiomers, draw only one enantiomer in the box, and include the note "+ enantiomer".



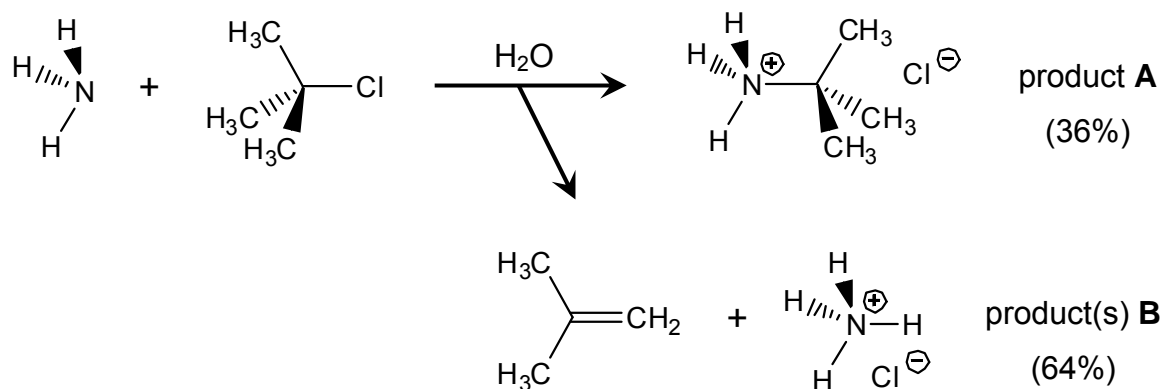


4. (12 pts) For each reaction shown below, **circle all potential products**. Keep in mind that, for each case, you might circle one, multiple, or no molecules.

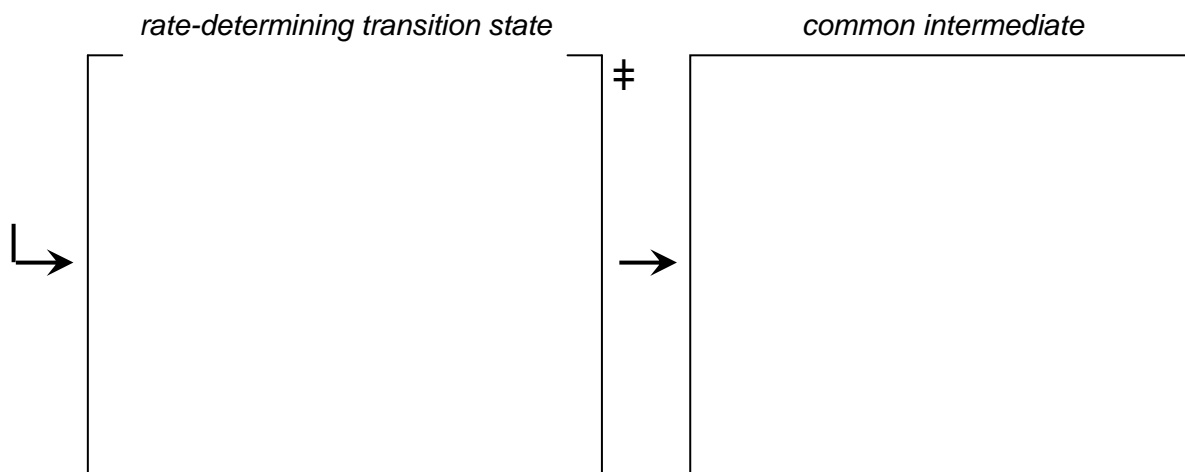




5. (23 pts) Ammonia reacts with *tert*-butylchloride to yield two sets of products:



(a) The two products are made from the same rate-determining transition state, and through the same reactive intermediate. What are the structures of those two states?

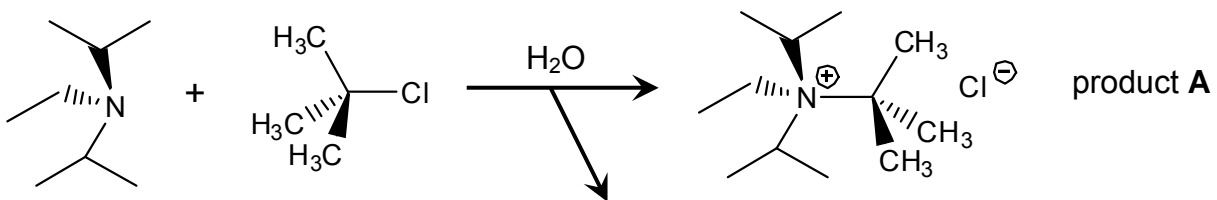


(b) On the diagram on the next page, **draw potential energy curves that describe the formation of each of your two products.** For each curve:

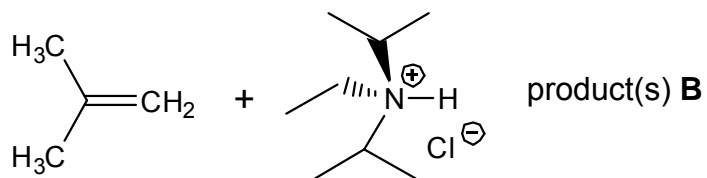
- Draw energy levels for all transition states and intermediates, and connect them with curves. You do not need to draw any chemical structures, just energies.
- Energy levels for the starting material and the two products are given.
- Wherever your two paths share common intermediates or transition states, you only need to draw one curve; draw two separate curves only where the paths diverge.



How would the reaction change if ammonia was replaced with diisopropylethylamine (DIPEA)?



(c) Would the overall rate of reaction—the combined rate of making products **A** and **B**—change? Would the product ratio **A/B** change? (Circle one answer for each question.)



Using DIPEA would make the overall reaction

**FASTER**

**SLOWER**

proceed at the  
**SAME RATE**

Using DIPEA would make the product ratio **A/B**

**INCREASE**  
(favor **A** over **B**)

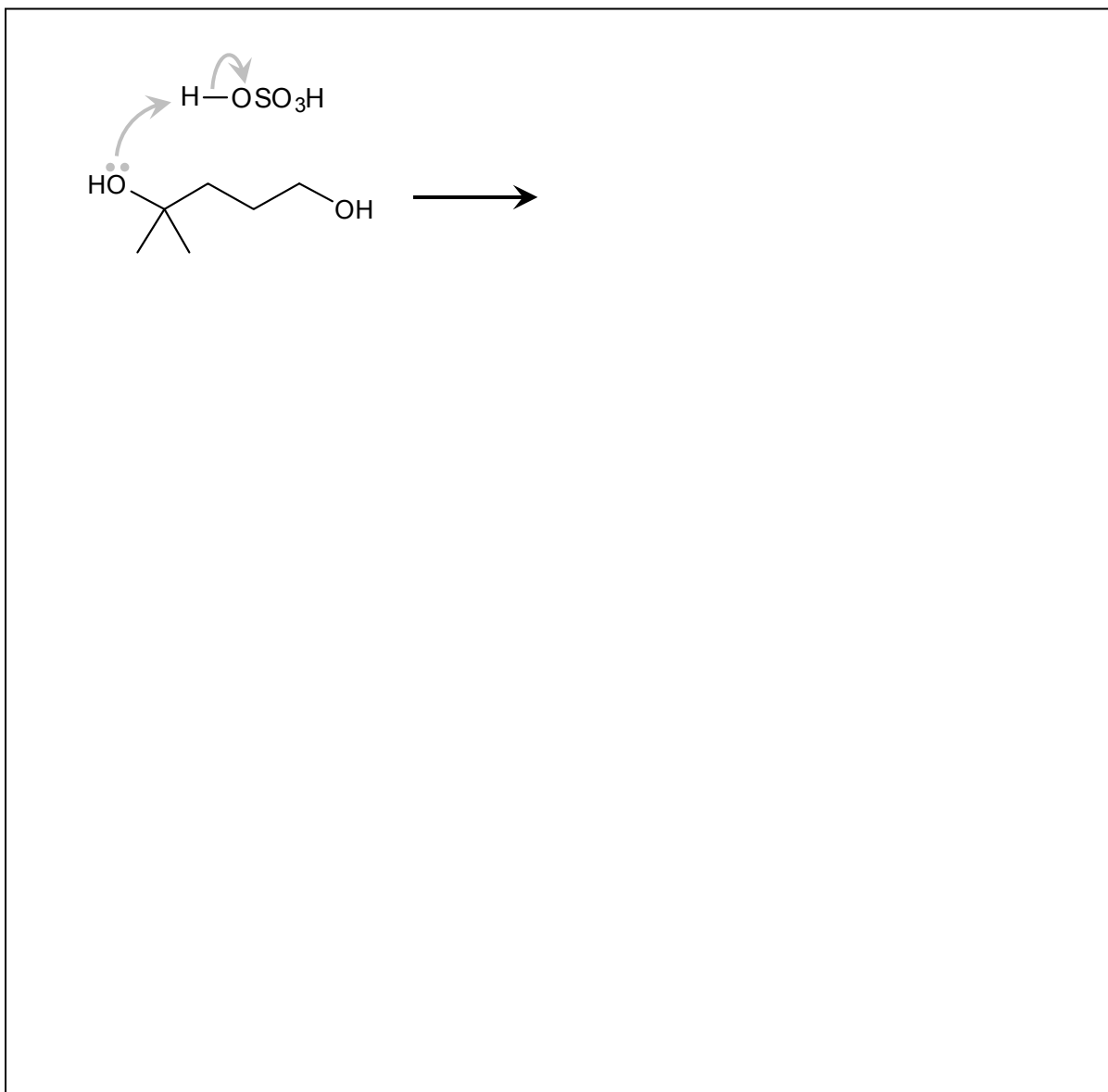
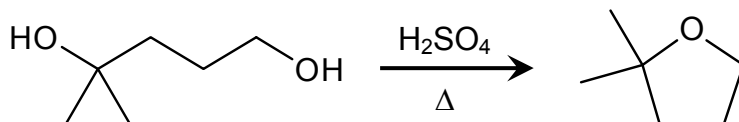
**DECREASE**  
(favor **B** over **A**)

**STAY THE SAME**

6. (14 pts) For the reaction shown below, draw a mechanism that explains how the product is generated from the starting material. In your answer, make sure that you:


- Draw each step of the mechanism separately;
- Use “electron pushing” to show where the electrons in each step go;
- Use only the molecules that you are given; do not invoke reactants or solvents that aren't in the problem.

I have drawn the first step of the mechanism for you, but you need to supply the intermediate.



		1		2		3		4		5		6		7		8		9		10		11		12		13		14		15		16		17		18																																																																																																																																																																								
		1A		2A		3B		4B		5B		6B		7B		8B						1B		2B		3A		4A		5A		6A		7A		8A																																																																																																																																																																								
1	1	<b>H</b> Hydrogen 1.01	2	<b>He</b> Helium 4.00	3	4	<b>Li</b> Lithium 6.94	5	<b>Be</b> Beryllium 9.01	6	7	<b>B</b> Boron 10.81	8	<b>C</b> Carbon 12.01	9	<b>N</b> Nitrogen 14.01	10	<b>O</b> Oxygen 16.00	11	<b>F</b> Fluorine 19.00	12	<b>Ne</b> Neon 20.18	13	<b>Na</b> Sodium 22.99	14	<b>Mg</b> Magnesium 24.31	15	<b>Al</b> Aluminum 26.98	16	<b>Si</b> Silicon 28.09	17	<b>P</b> Phosphorus 30.97	18	<b>S</b> Sulfur 32.07	19	<b>Cl</b> Chlorine 35.45	20	<b>Ar</b> Argon 39.95	21	<b>K</b> Potassium 39.10	22	<b>Ca</b> Calcium 40.08	23	<b>Sc</b> Scandium 44.96	24	<b>Ti</b> Titanium 47.87	25	<b>V</b> Vanadium 50.94	26	<b>Cr</b> Chromium 52.00	27	<b>Mn</b> Manganese 54.94	28	<b>Fe</b> Iron 55.85	29	<b>Ni</b> Nickel 58.69	30	<b>Cu</b> Copper 63.55	31	<b>Zn</b> Zinc 65.39	32	<b>Ga</b> Gallium 69.72	33	<b>Ge</b> Germanium 72.61	34	<b>As</b> Arsenic 74.92	35	<b>Se</b> Selenium 78.96	36	<b>Kr</b> Krypton 83.80	37	<b>Rb</b> Rubidium 85.47	38	<b>Sr</b> Strontium 87.62	39	<b>Y</b> Yttrium 88.91	40	<b>Zr</b> Zirconium 91.22	41	<b>Nb</b> Niobium 92.91	42	<b>Mo</b> Molybdenum 95.94	43	<b>Tc</b> Technetium (98)	44	<b>Ru</b> Ruthenium 101.07	45	<b>Rh</b> Rhodium 102.91	46	<b>Pd</b> Palladium 106.42	47	<b>Ag</b> Silver 107.87	48	<b>Cd</b> Cadmium 112.41	49	<b>In</b> Indium 114.82	50	<b>Sn</b> Tin 118.71	51	<b>Sb</b> Antimony 121.76	52	<b>Te</b> Tellurium 127.60	53	<b>I</b> Iodine 126.90	54	<b>Xe</b> Xenon 131.29	55	<b>Cs</b> Cesium 132.91	56	<b>Ba</b> Barium 137.33	57	<b>La</b> Lanthanum 138.91	58	<b>Ce</b> Cerium 140.12	59	<b>Pr</b> Praseodymium 140.91	60	<b>Nd</b> Neodymium 144.24	61	<b>Pm</b> Promethium (145)	62	<b>Sm</b> Samarium 150.36	63	<b>Eu</b> Europium 151.96	64	<b>Gd</b> Gadolinium 157.25	65	<b>Tb</b> Terbium 158.93	66	<b>Dy</b> Dysprosium 162.50	67	<b>Ho</b> Holmium 164.93	68	<b>Er</b> Erbium 167.26	69	<b>Tm</b> Thulium 168.93	70	<b>Yb</b> Ytterbium 173.04	71	<b>Lu</b> Lutetium 174.97	72	<b>Fr</b> Francium (223)	73	<b>Ra</b> Radium (226)	74	<b>Ac</b> Actinium (227)	75	<b>Rf</b> Rutherfordium (261)	76	<b>Hf</b> Hafnium 178.49	77	<b>Ta</b> Tantalum 180.95	78	<b>W</b> Tungsten 183.84	79	<b>Re</b> Rhenium 186.21	80	<b>Os</b> Osmium 190.23	81	<b>Ir</b> Iridium 192.22	82	<b>Pt</b> Platinum 195.08	83	<b>Au</b> Gold 196.97	84	<b>Hg</b> Mercury 200.59	85	<b>Tl</b> Thallium 204.38	86	<b>Pb</b> Lead 207.2	87	<b>Bi</b> Bismuth 208.98	88	<b>Po</b> Polonium (209)	89	<b>At</b> Astatine (210)	90	<b>Rn</b> Radon (222)	91	<b>Th</b> Thorium 232.04	92	<b>Pa</b> Protactinium 231.04	93	<b>U</b> Uranium 238.03	94	<b>Np</b> Neptunium (237)	95	<b>Pu</b> Plutonium (244)	96	<b>Am</b> Americium (243)	97	<b>Cm</b> Curium (247)	98	<b>Bk</b> Berkelium (247)	99	<b>Cf</b> Californium (251)	100	<b>Fm</b> Fermium (257)	101	<b>Md</b> Mendelevium (258)	102	<b>No</b> Nobelium (259)	103	<b>Lr</b> Lawrencium (262)

**Key**



\* If this number is in parentheses, then it refers to the atomic mass of the most stable isotope.